

1. Consider the function $f(x, y) = \sin(x^2 - y^2)$.

a) (2 points) Find the gradient ∇f .

$$\nabla f = (f_x, f_y) = (2x \cos(x^2 - y^2), -2y \cos(x^2 - y^2))$$

b) (3 points) At the point $(x, y) = (1, 1)$, find the direction in which the directional derivative is maximum.

The direction of the maximal directional derivative is

$$\text{given by } \nabla f(1, 1) = (2, -2)$$

c) (2 points) At the point $(x, y) = (1, 1)$, find the direction in which the directional derivative is zero.

Take $\vec{u} = (a, b)$ to be the unit vector in this direction.

$$D_{\vec{u}} f(1, 1) = \nabla f(1, 1) \cdot \vec{u} = (2, -2) \cdot (a, b) = 2a - 2b.$$

$$D_{\vec{u}} f(1, 1) = 0 \Rightarrow 2a - 2b = 0 \Rightarrow a = b.$$

$\Rightarrow \vec{u}$ is the unit vector with $a = b$

$$\Rightarrow \vec{u} = \pm \frac{(1, 1)}{|(1, 1)|} = \pm \frac{1}{\sqrt{2}} (1, 1)$$

d) (3 points) Evaluate the limit

very tricky!

$$\lim_{\delta \rightarrow 0} \frac{f(1 + \delta, 1 - 2\delta)}{\delta}.$$

$$\text{Set } \vec{r}(t) = (1+t, 1-2t) \Rightarrow f(\vec{r}(0)) = f(1, 1) = \sin(1^2 - 1^2) = 0$$

$$\lim_{\delta \rightarrow 0} \frac{f(1+\delta, 1-2\delta)}{\delta} = \lim_{\delta \rightarrow 0} \frac{f(\vec{r}(\delta)) - f(\vec{r}(0))}{\delta}$$

$$= \left. \frac{df}{dt} \right|_{t=0} = \nabla f(\vec{r}(0)) \cdot \vec{r}'(0)$$

\uparrow
chain rule

$$= \nabla f(1, 1) \cdot (1, -2)$$

$$= (2, -2) \cdot (1, -2) = 6$$

Note (1) There is a conceptual way to answer part (d) using directional derivatives.

$$f(1,1) = \sin(1^2 - 1^2) = 0$$

$$\Rightarrow \lim_{\delta \rightarrow 0} \frac{f(1+\delta, 1-2\delta)}{\delta} = \lim_{\delta \rightarrow 0} \frac{f(1+\delta, 1-2\delta) - f(1,1)}{\delta}$$

This is the change rate of f at $(1,1)$ when you move by the vector $\vec{v} = (1, -2)$ every second.

Take \vec{u} to be the unit vector of \vec{v} .

Then the above limit is the change rate of f at $(1,1)$ in the direction of \vec{u} and speed $|\vec{v}|$.

So we compute

$$\begin{aligned} |\vec{v}| D_{\vec{u}} f(1,1) &= |\vec{v}| \nabla f(1,1) \cdot \vec{u} = |\vec{v}| \nabla f(1,1) \cdot \frac{\vec{v}}{|\vec{v}|} \\ &= \nabla f(1,1) \cdot \vec{v} = (2, -2) \cdot (1, -2) = 6 \end{aligned}$$

(2) You can also use L'Hopital's rule.

$$\lim_{\delta \rightarrow 0} f(1+\delta, 1-2\delta) = f(1,1) = \sin(1^2 - 1^2) = 0$$

$$\Rightarrow \lim_{\delta \rightarrow 0} \frac{f(1+\delta, 1-2\delta)}{\delta} = \frac{df}{dt} \Big|_{t=0} = \nabla f(\vec{r}(0)) \cdot \vec{r}'(0)$$

\uparrow L'Hopital \uparrow chain rule

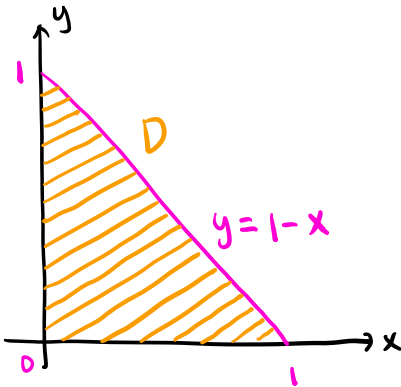
$$= \nabla f(1,1) \cdot (1, -2)$$

$$= (2, -2) \cdot (1, -2) = 6$$

2. Consider the double integral

$$\iint_D x^2 y^2 dA.$$

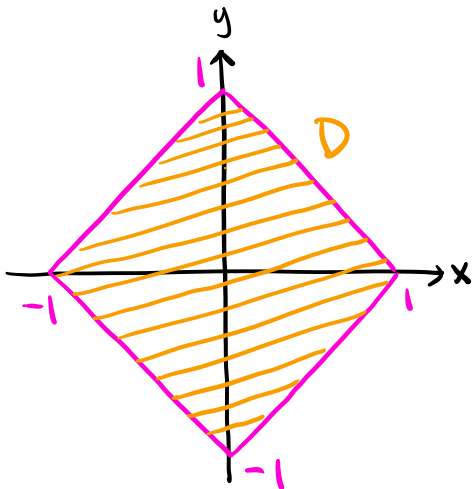
- a) (6 points) Evaluate the integral if D is the triangular region with vertices $(0, 0)$, $(1, 0)$, and $(0, 1)$.



$$D: 0 \leq x \leq 1, 0 \leq y \leq 1-x$$

$$\begin{aligned} \iint_D x^2 y^2 dA &= \int_0^1 \int_0^{1-x} x^2 y^2 dy dx = \int_0^1 \frac{x^2 y^3}{3} \Big|_{y=0}^{y=1-x} dx \\ &= \frac{1}{3} \int_0^1 x^2 (1-x)^3 dx = \frac{1}{3} \int_0^1 x^2 - 3x^3 + 3x^4 - x^5 dx \\ &= \frac{1}{3} \left(\frac{x^3}{3} - \frac{3}{4} x^4 + \frac{3}{5} x^5 - \frac{x^6}{6} \right) \Big|_{x=0}^{x=1} = \boxed{\frac{1}{180}} \end{aligned}$$

- b) (4 points) Evaluate the integral if D is the square with vertices at $(1, 0)$, $(0, 1)$, $(-1, 0)$, and $(0, -1)$.



Divide D into four parts D_1, D_2, D_3, D_4 in each quadrant.

$x^2 y^2$ is even with respect to x and y

$$\Rightarrow \iint_D x^2 y^2 dA = 4 \iint_{D_1} x^2 y^2 dA$$

$$= 4 \cdot \frac{1}{180} = \boxed{\frac{1}{45}}$$

↑
part (a)

3. Consider the solid sphere $0 \leq x^2 + y^2 + z^2 \leq 1$. Suppose the density at a point in the solid is equal to $1/r$, where $r = \sqrt{x^2 + y^2 + z^2}$ (distance from the origin).

a) (6 points) Find the total mass of the solid.

E : the solid sphere $x^2 + y^2 + z^2 \leq 1$

$\Rightarrow 0 \leq \theta \leq 2\pi, 0 \leq \varphi \leq \pi, 0 \leq \rho \leq 1$ in spherical coordinates.

The density is $\rho(x, y, z) = \frac{1}{\sqrt{x^2 + y^2 + z^2}}$

$$\Rightarrow m = \iiint_E \rho(x, y, z) dV = \iiint_E \frac{1}{\sqrt{x^2 + y^2 + z^2}} dV$$

$$= \int_0^{2\pi} \int_0^\pi \int_0^1 \frac{1}{\rho} \cdot \rho^2 \sin \varphi \, d\rho \, d\varphi \, d\theta = \int_0^{2\pi} \int_0^\pi \frac{\rho^2}{2} \sin \varphi \Big|_{\rho=0}^{\rho=1} d\varphi \, d\theta$$

$$= \int_0^{2\pi} \int_0^\pi \frac{1}{2} \sin \varphi \, d\varphi \, d\theta = \int_0^{2\pi} -\frac{1}{2} \cos \varphi \Big|_{\varphi=0}^{\varphi=\pi} d\theta$$

$$= \int_0^{2\pi} 1 \, d\theta = \boxed{2\pi}$$

b) (4 points) Find $a > 0$ such that the mass inside the volume $0 \leq x^2 + y^2 + z^2 \leq a^2$ is equal to the mass outside.

E : the solid sphere $x^2 + y^2 + z^2 \leq a^2$

$\Rightarrow 0 \leq \theta \leq 2\pi, 0 \leq \varphi \leq \pi, 0 \leq \rho \leq a$ in spherical coordinates.

$$\Rightarrow m = \iiint_E \rho(x, y, z) dV = \iiint_E \frac{1}{\sqrt{x^2 + y^2 + z^2}} dV$$

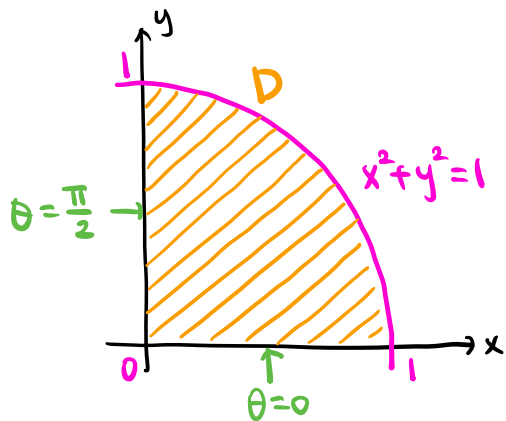
$$= \int_0^{2\pi} \int_0^\pi \int_0^a \frac{1}{\rho} \cdot \rho^2 \sin \varphi \, d\rho \, d\varphi \, d\theta = \int_0^{2\pi} \int_0^\pi \frac{\rho^2}{2} \sin \varphi \Big|_{\rho=0}^{\rho=a} d\varphi \, d\theta$$

$$= \int_0^{2\pi} \int_0^\pi \frac{a^2}{2} \sin \varphi \, d\varphi \, d\theta = a^2 \int_0^{2\pi} \int_0^\pi \frac{1}{2} \sin \varphi \, d\varphi \, d\theta = 2a^2 \pi$$

We want $m = \frac{1}{2} \cdot 2\pi \Rightarrow 2a^2 \pi = \pi \Rightarrow a = \boxed{\frac{1}{\sqrt{2}}}$

4. Consider the quarter disc $0 \leq x^2 + y^2 \leq 1$, $x \geq 0$, $y \geq 0$. Suppose the density (mass per unit area) at a point in the quarter disc is given by $\rho(x, y) = x^2 + y^2$.

a) (3 points) Find the total mass of the quarter disc.



In polar coordinates, the region D is given by $0 \leq \theta \leq \frac{\pi}{2}$ and $0 \leq r \leq 1$.

$$\begin{aligned}
 m &= \iint_D \rho(x, y) dA = \iint_D x^2 + y^2 dA = \int_0^{\pi/2} \int_0^1 r^2 \cdot r dr d\theta \quad \text{Jacobian} \\
 &= \int_0^{\pi/2} \left. \frac{r^4}{4} \right|_{r=0}^{r=1} d\theta = \int_0^{\pi/2} \frac{1}{4} d\theta = \boxed{\frac{\pi}{8}}
 \end{aligned}$$

b) (4 points) Find \bar{x} , the x -coordinate of the center of mass.

$$\begin{aligned}
 \bar{x} &= \frac{1}{m} \iint_D x \rho(x, y) dA = \frac{8}{\pi} \iint_D x(x^2 + y^2) dA \\
 &= \frac{8}{\pi} \int_0^{\pi/2} \int_0^1 r \cos \theta \cdot r^2 \cdot r dr d\theta \quad \text{Jacobian} = \frac{8}{\pi} \int_0^{\pi/2} \left. \frac{r^5}{5} \cos \theta \right|_{r=0}^{r=1} d\theta \\
 &= \frac{8}{\pi} \int_0^{\pi/2} \frac{1}{5} \cos \theta d\theta = \frac{8}{\pi} \cdot \frac{1}{5} \sin \theta \Big|_{\theta=0}^{\theta=\pi/2} = \boxed{\frac{8}{5\pi}}
 \end{aligned}$$

c) (3 points) Find the distance of the center of mass from the origin.

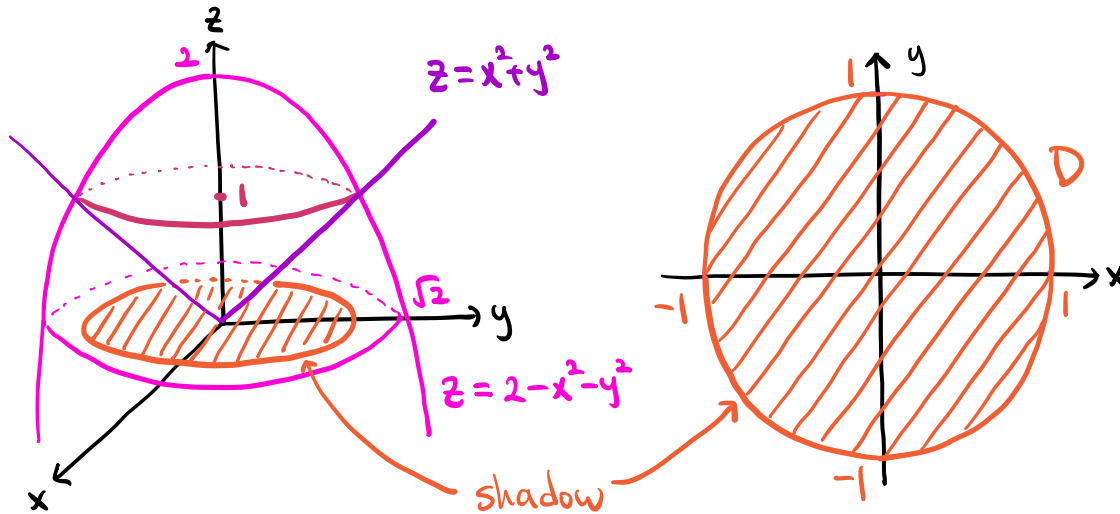
The region D remains unchanged upon swapping x and y

$$\begin{aligned}
 \Rightarrow \bar{y} &= \frac{1}{m} \iint_D y \rho(x, y) dA = \frac{1}{m} \iint_D y(x^2 + y^2) dA \\
 &= \frac{1}{m} \iint_D x(x^2 + y^2) dA = \bar{x} = \frac{8}{5\pi} \\
 &\quad \uparrow \text{swapping } x \text{ and } y. \quad \quad \quad \uparrow \text{(b)}
 \end{aligned}$$

The distance is $\sqrt{\bar{x}^2 + \bar{y}^2} = \sqrt{2} \bar{x} = \boxed{\frac{8\sqrt{2}}{5\pi}}$

5. Consider the paraboloid surface $z = 2 - (x^2 + y^2)$ and the conical surface $z^2 = x^2 + y^2$ with $z \geq 0$.

a) (3 points) Find the value of z at which the two surfaces intersect.



The intersection is given by $z = 2 - x^2 - y^2$ and $z^2 = x^2 + y^2$

$$\Rightarrow z = 2 - z^2 \Rightarrow z^2 + z - 2 = 0 \Rightarrow z = \boxed{1}$$

\uparrow
 $z \geq 0$

b) (7 points) Find the surface area of the part of the paraboloid above that value of z .

The paraboloid is the graph of $f(x, y) = 2 - x^2 - y^2$.

The intersection circle is given by $z = 1$, $x^2 + y^2 = 1$.

\Rightarrow The shadow D of the surface is given by $x^2 + y^2 \leq 1$.

\Rightarrow In polar coordinates, D is given by $0 \leq \theta \leq 2\pi$, $0 \leq r \leq 1$.

$$\text{Area} = \iint_D \sqrt{1 + f_x^2 + f_y^2} \, dA = \iint_D \sqrt{1 + 4x^2 + 4y^2} \, dA$$

$$= \int_0^{2\pi} \int_0^1 \sqrt{1 + 4r^2} \cdot r \, dr \, d\theta = \int_0^{2\pi} \int_1^5 u^{\frac{1}{2}} \cdot \frac{1}{8} \, du \, d\theta$$

\uparrow
 $u = 1 + 4r^2$

$$= \int_0^{2\pi} \left. \frac{1}{12} u^{3/2} \right|_{u=1}^{u=5} \, d\theta = \int_0^{2\pi} \frac{1}{12} (5^{3/2} - 1) \, d\theta = \boxed{\frac{\pi}{6} (5^{3/2} - 1)}$$

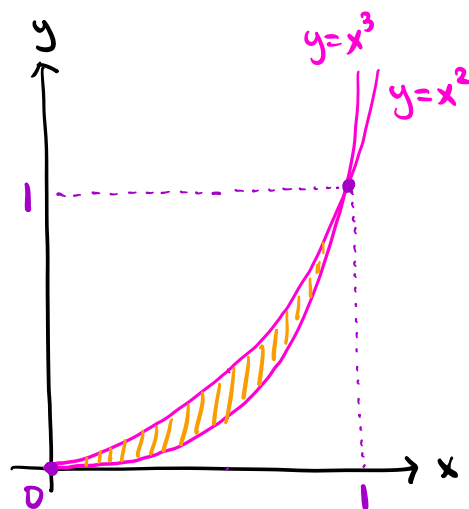
6. The first part asks you to change the order of integration in a double integral and the second part in a triple integral.

a) (5 points) Consider the iterated double integral

$$\int_{x=0}^1 \int_{y=x^3}^{x^2} f(x, y) dy dx,$$

which has y first (innermost) and x second. Sketch the region of integration and rewrite the iterated integral so that x is first (innermost) and y is second.

The bounds are $0 \leq x \leq 1$, $x^3 \leq y \leq x^2$.



Intersection: $y = x^2$ and $y = x^3$
 $\Rightarrow x^2 = x^3 \Rightarrow x = 0, 1$
 $\Rightarrow (x, y) = (0, 0), (1, 1)$.

The boundary curves are

$$y = x^2 \text{ and } y = x^3 \rightsquigarrow x = y^{1/2} \text{ and } x = y^{1/3}.$$

\uparrow
 $x \geq 0$

The bounds are $0 \leq y \leq 1$, $y^{1/2} \leq x \leq y^{1/3}$

\Rightarrow The given integral is equal to $\int_0^1 \int_{y^{1/2}}^{y^{1/3}} f(x, y) dx dy$

Note You can also algebraically find the bounds.

The outer integral is with respect to dy

$$\Rightarrow 0 \leq \underset{\substack{\uparrow \\ x \geq 0}}{x^3} \leq y \leq \underset{\substack{\uparrow \\ x \leq 1}}{x^2} \leq 1 \Rightarrow 0 \leq y \leq 1.$$

$$x^3 \leq y \Rightarrow x \leq y^{1/3}, \quad y \leq x^2 \Rightarrow y^{1/2} \leq x$$

$$\Rightarrow y^{1/2} \leq x \leq y^{1/3}$$

b) (5 points) Consider the triple integral

$$\int_{z=0}^1 \int_{y=z}^1 \int_{x=z}^1 f(x, y, z) dx dy dz,$$

which has x first (innermost), y second, and z third. Rewrite the iterated integral in reverse order: z first (innermost), y second, and x third.

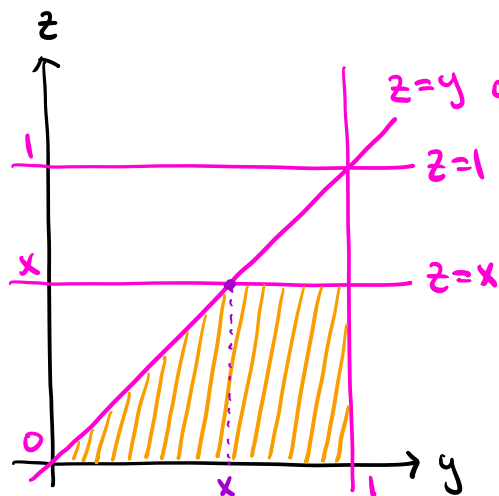
The bounds are $0 \leq z \leq 1$, $z \leq y \leq 1$, $z \leq x \leq 1$.

The outermost integral is with respect to dx

$$\Rightarrow 0 \leq z \leq x \leq 1 \Rightarrow 0 \leq x \leq 1.$$

For the inner double integral, we look at the cross section with constant x .

The boundary conditions are $0 \leq z \leq 1$, $z \leq y \leq 1$, $z \leq x$.



$z=y$ or $y=z$ Intersection: $z=y$ and $z=x$
 $\Rightarrow (y, z) = (x, x)$.

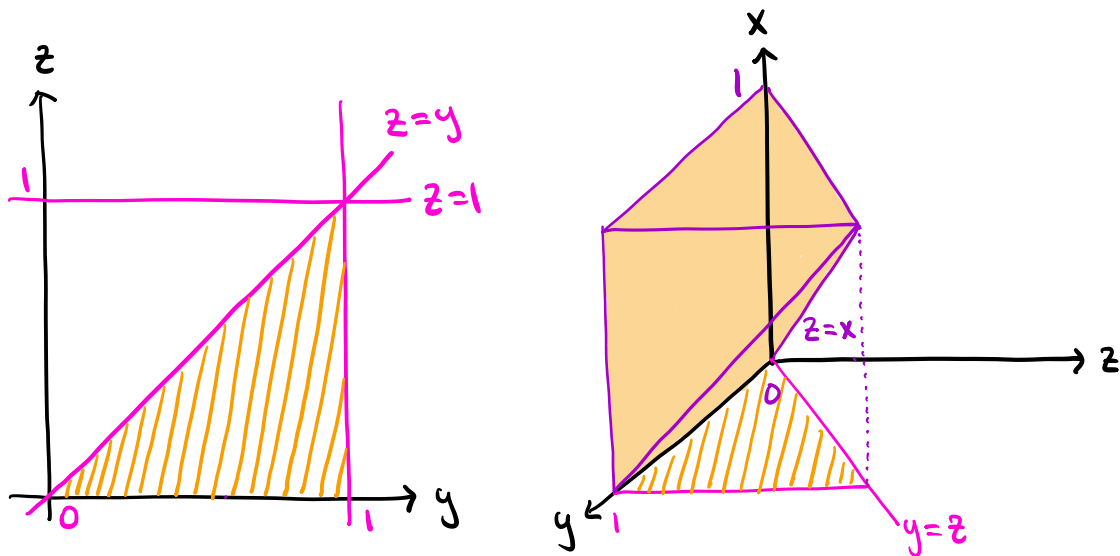
$$\left. \begin{array}{l} 0 \leq y \leq x \Rightarrow 0 \leq z \leq y \\ x \leq y \leq 1 \Rightarrow 0 \leq z \leq x \end{array} \right\}$$

\Rightarrow The given integral is equal to

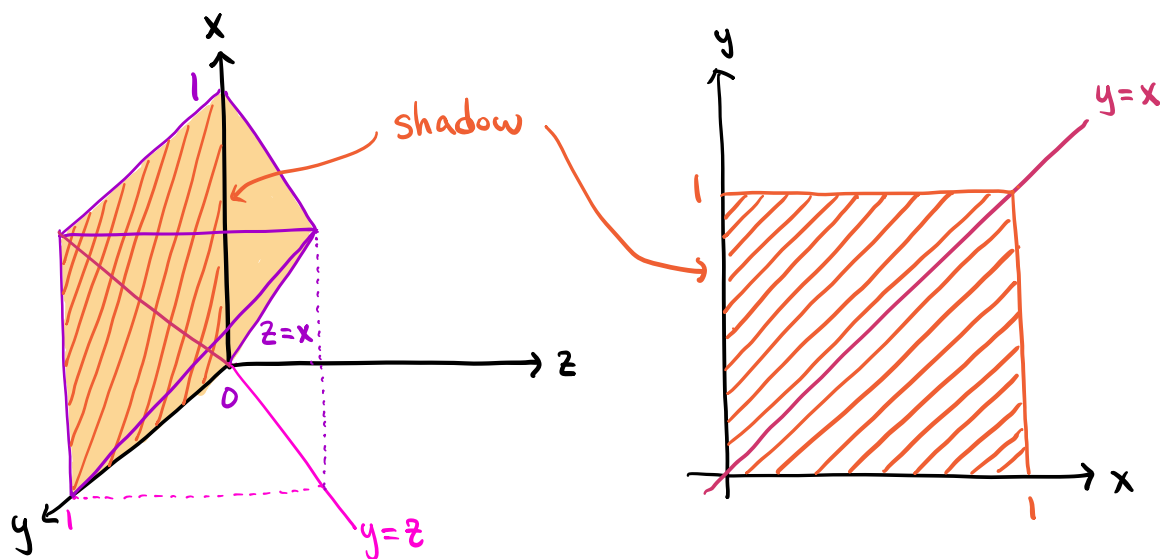
$$\int_0^1 \int_0^x \int_0^y f(x, y, z) dz dy dx + \int_0^1 \int_x^1 \int_0^x f(x, y, z) dz dy dx$$

Note You can also use the projection method.

The bounds are $0 \leq z \leq 1$, $z \leq y \leq 1$, $z \leq x \leq 1$.



For the outer double integral, we look at the shadow on the xy -plane.



However, the bounds for z are not uniform:

$$\begin{cases} 0 \leq x \leq 1, 0 \leq y \leq x \Rightarrow 0 \leq z \leq y \\ 0 \leq x \leq 1, x \leq y \leq 1 \Rightarrow 0 \leq z \leq x \end{cases}$$

\Rightarrow The given integral is equal to

$$\int_0^1 \int_0^x \int_0^y f(x, y, z) dz dy dx + \int_0^1 \int_x^1 \int_0^x f(x, y, z) dz dy dx$$

* This problem is not correctly formulated.

7. The first part is a maximization problem and the second part a minimization problem.

a) (5 points) Maximize the product xyz subject to the requirement $2x + y + 3z = 1$.

$$\text{Set } f(x, y, z) = xyz, \quad g(x, y, z) = 2x + y + 3z - 1.$$

$$\text{Solve } \nabla f = \lambda \nabla g \text{ and } g = 0$$

$$\Rightarrow (yz, zx, xy) = \lambda(2, 1, 3) \text{ and } 2x + y + 3z - 1 = 0$$

$$\Rightarrow \begin{cases} yz = 2\lambda \rightsquigarrow xyz = 2\lambda x \\ zx = \lambda \rightsquigarrow xyz = \lambda y \\ xy = 3\lambda \rightsquigarrow xyz = 3\lambda z \end{cases}$$

$$\Rightarrow 2\lambda x = \lambda y = 3\lambda z$$

$$\text{Case 1 } \lambda = 0 : yz = 2\lambda = 0, \quad zx = \lambda = 0, \quad xy = 3\lambda = 0$$

$$\Rightarrow x = y = z = 0 \Rightarrow 2x + y + 3z - 1 \neq 0.$$

\Rightarrow no solutions.

$$\text{Case 2 } \lambda \neq 0 : 2x = y = 3z$$

$$2x + y + 3z - 1 = 0 \rightsquigarrow y + y + y - 1 = 0 \rightsquigarrow y = \frac{1}{3}.$$

$$\Rightarrow \underline{x = \frac{1}{6}, y = \frac{1}{3}, z = \frac{1}{9}}.$$

$$\text{The maximum value is } f\left(\frac{1}{6}, \frac{1}{3}, \frac{1}{9}\right) = \boxed{\frac{1}{162}}$$

Note The problem should specify that x, y, z are positive,

since otherwise there is no maximum values.

- b) (5 points) Find the point on the paraboloid $z = x^2 + y^2$ that is closest to the point $P = (6, 3, 4)$.

Distance from P is $\sqrt{(x-6)^2 + (y-3)^2 + (z-4)^2}$

We find the minimum of $(x-6)^2 + (y-3)^2 + (z-4)^2$ subject to the constraint $z = x^2 + y^2$.

Set $f(x, y, z) = (x-6)^2 + (y-3)^2 + (z-4)^2$ and $g(x, y, z) = x^2 + y^2 - z$.

Solve $\nabla f = \lambda \nabla g$ and $g = 0$.

$$\Rightarrow (2(x-6), 2(y-3), 2(z-4)) = \lambda(2x, 2y, -1) \text{ and } x^2 + y^2 - z = 0.$$

$$\leadsto 2(x-6) = 2\lambda x, \quad 2(y-3) = 2\lambda y, \quad 2(z-4) = -\lambda, \quad x^2 + y^2 = z$$

$$\leadsto x-6 = \lambda x, \quad y-3 = \lambda y, \quad 2z-8 = -\lambda, \quad x^2 + y^2 = z.$$

$$\leadsto (1-\lambda)x = 6, \quad (1-\lambda)y = 3, \quad 2z-8 = -\lambda, \quad x^2 + y^2 = z.$$

$$\leadsto x = \frac{6}{1-\lambda}, \quad y = \frac{3}{1-\lambda}, \quad z = \frac{8-\lambda}{2}, \quad x^2 + y^2 = z.$$

$$x^2 + y^2 = z \leadsto \left(\frac{6}{1-\lambda}\right)^2 + \left(\frac{3}{1-\lambda}\right)^2 = \frac{8-\lambda}{2} \leadsto 90 = (1-\lambda)^2(8-\lambda)$$

$$\leadsto \lambda^3 - 10\lambda^2 + 17\lambda + 82 = 0$$

$$\leadsto (\lambda+2)(\lambda^2 - 12\lambda + 41) = 0$$

$$\leadsto \lambda = -2$$

$$\Rightarrow x = 2, \quad y = 1, \quad z = 5.$$

The closest point is $(2, 1, 5)$